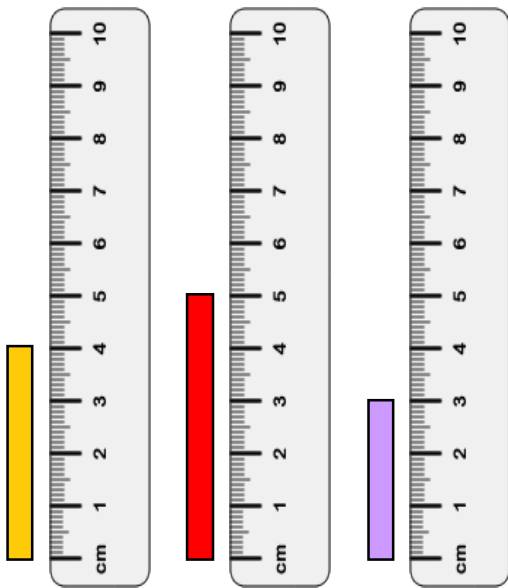


Comparing and measuring lengths



The orange block is _____ cm tall.

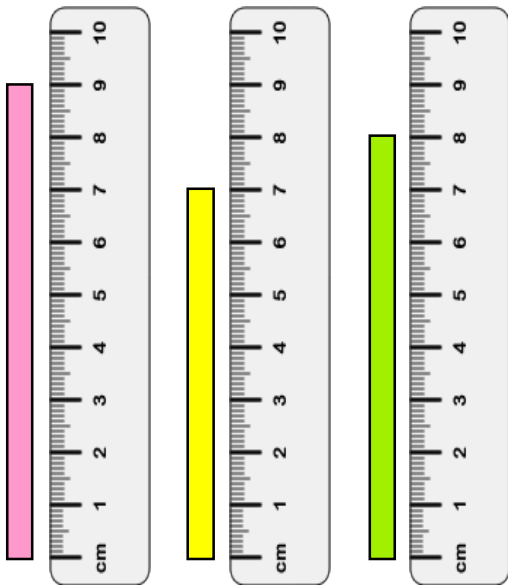
The red block is _____ cm tall.

The purple block is _____ cm tall.

The _____ block is the tallest.

The _____ block is the shortest.

The orange block is _____ than the purple block but _____ than the red.



The pink block is _____ cm tall.

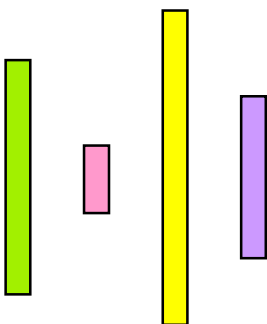
The yellow block is _____ cm tall.

The green block is _____ cm tall.

The _____ block is the tallest.

The _____ block is the shortest.

The green block is _____ than the pink block but _____ than the yellow.



Which block is the tallest? _____

Which block is the shortest? _____

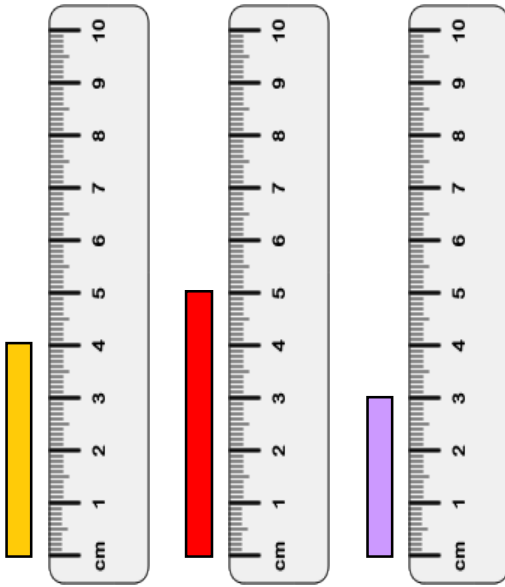
Which block is taller than pink but shorter than green?

Order the blocks from shortest to tallest:

_____, _____, _____, _____

Can you use the words *shortest, tall, taller, tallest* to describe the blocks?

Answers - Comparing and measuring lengths



The orange block is 4 cm tall.

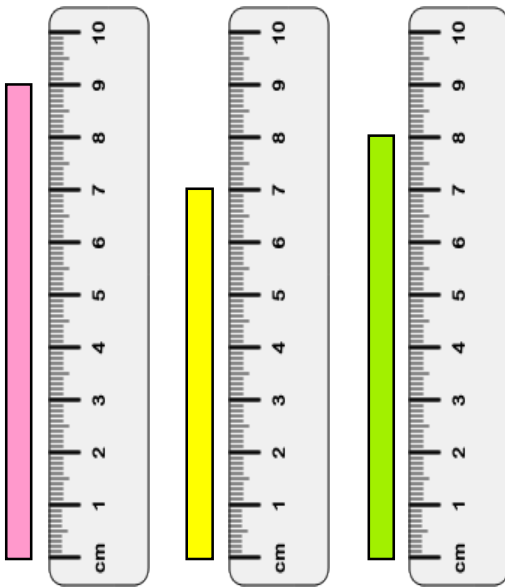
The red block is 5 cm tall.

The purple block is 3 cm tall.

The red block is the tallest.

The purple block is the shortest.

The orange block is taller than the purple block but shorter than the red.



The pink block is 9 cm tall.


The yellow block is 7 cm tall.

The green block is 8 cm tall.

The pink block is the tallest.

The yellow block is the shortest.

The green block is shorter than the pink block but taller than the yellow.



Which block is the tallest? yellow

Which block is the shortest? purple

Which block is taller than pink but shorter than green?
purple

Order the blocks from shortest to tallest:

purple , green , yellow , pink

Can you use the words *shortest, tall, taller, tallest* to describe the blocks?