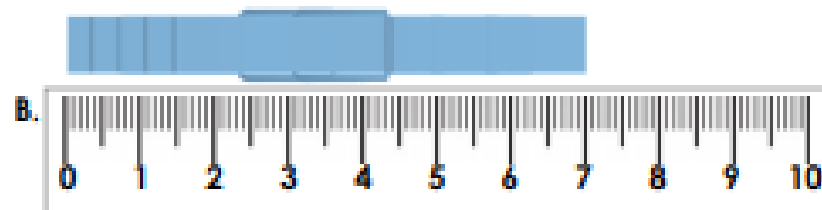


## Measure Length 2

1. Match each peg to the correct measurement.



7cm



5cm



VP  
HW/Ed

2. Use the measurements to complete the sentences below.



A. The log measures \_\_\_\_ cm.



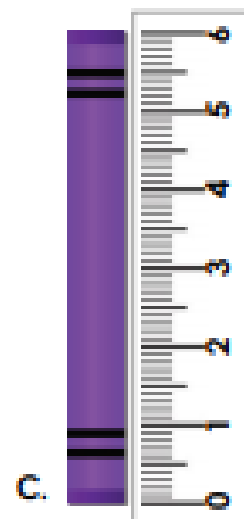

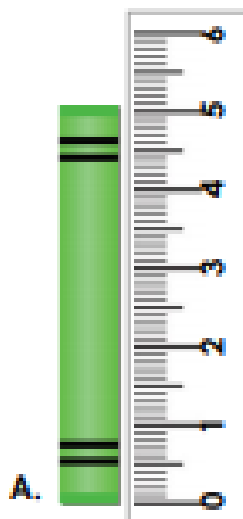
B. The tube measures \_\_\_\_ cm.

C. The \_\_\_\_\_ is shorter than the \_\_\_\_\_.



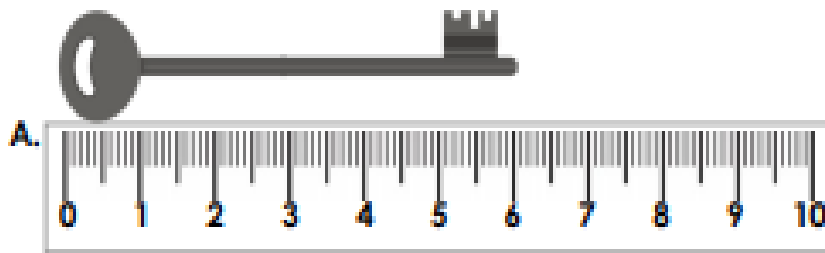
VP  
HW/Ed

3. Measure the crayons below and order them by height.

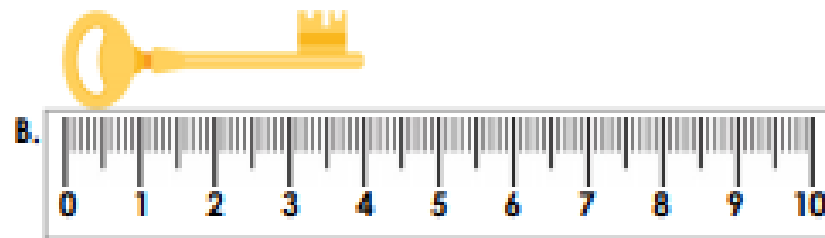


RPS  
HW/Ed

4. Match each key to the correct measurement.



4cm




6cm



VF  
H/W/Ed

5. Use the measurements to complete the sentences below.



A. The twig measures \_\_\_\_ cm.



B. The leaf measures \_\_\_\_ cm.






C. The \_\_\_\_\_ is longer than the \_\_\_\_\_.



VF  
H/W/Ed

6. Measure the flowers below and order them by height.



EPS  
H/W/Ed

7. Match each gardening tool to the correct measurement.



6cm




8cm



VF  
HW/Ed

8. Use the measurements to complete the sentences below.



A. The shell measures \_\_\_ cm.




B. The twig measures \_\_\_ cm.

C. The \_\_\_\_\_ is longer than the \_\_\_\_\_.



VF  
HW/Ed

9. Measure each cactus below and order them by height.



VF  
HW/Ed